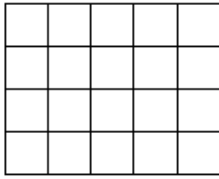


AREA SHEET 2 ANSWERS

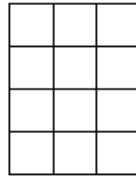


1)



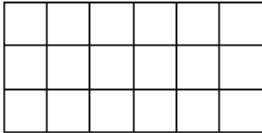
Area = $5 \times 4 = 20$ square cm

2)



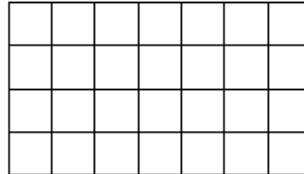
Area = $3 \times 4 = 12$ square cm

3)



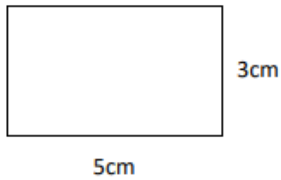
Area = $6 \times 3 = 18$ square cm

4)



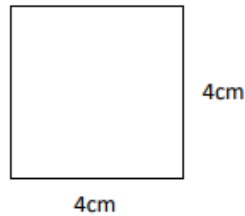
Area = $7 \times 4 = 28$ square cm

5)



Area = $3 \times 5 = 15$ square cm

6)




Area = $4 \times 4 = 16$ square cm

AREA SHEET 3 ANSWERS

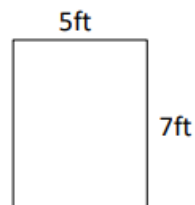


1)



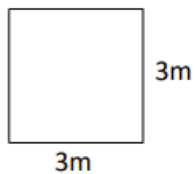
Area = 24 square cm

2)



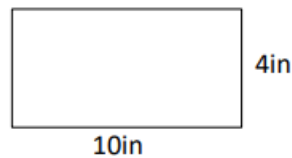
Area = 35 square ft

3)



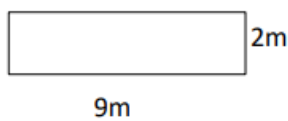
Area = 9 square m

4)



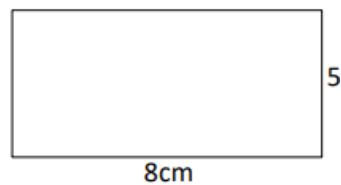
Area = 40 square in

5)



Area = 18 square m

6)



Area = 40 square cm