
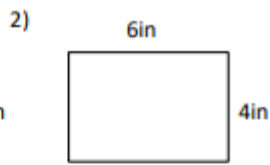


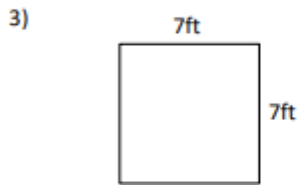
PERIMETER SHEET 3 ANSWERS




Perimeter = 24 cm



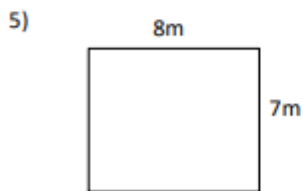
Perimeter = 20 in



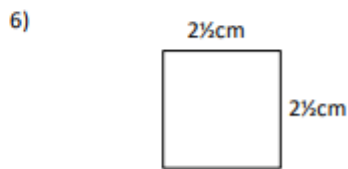
Perimeter = 28 ft



Perimeter = 28 m



Perimeter = 30 m



Perimeter = 10 cm

<p>1)</p> <p>Perimeter = 18 cm</p>	<p>2)</p> <p>Perimeter = 13 in</p>
<p>3)</p> <p>Perimeter = 20 cm</p>	<p>4)</p> <p>Perimeter = 28 m</p>
<p>5)</p> <p>Perimeter = 27 ft</p>	<p>6)</p> <p>Perimeter = 22 cm</p>